

Dreiecke berechnen

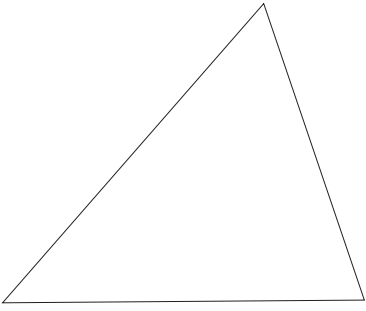
8b/G

09/10

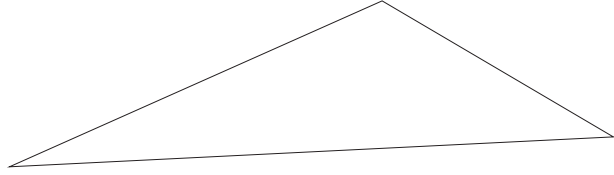
Umfang $u = a + b + c$ Fläche $A = g \cdot h / 2$

Du musst zuerst die Seiten messen. Dann zeichne eine Höhe ein und miss sie ebenfalls. Jetzt kannst du Umfang und Fläche ausrechnen!

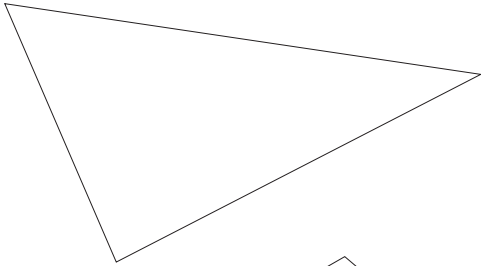
a)



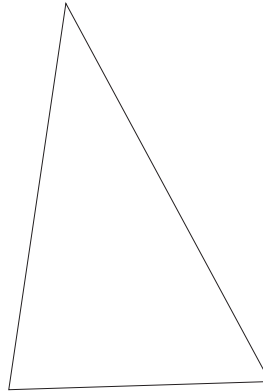
b)



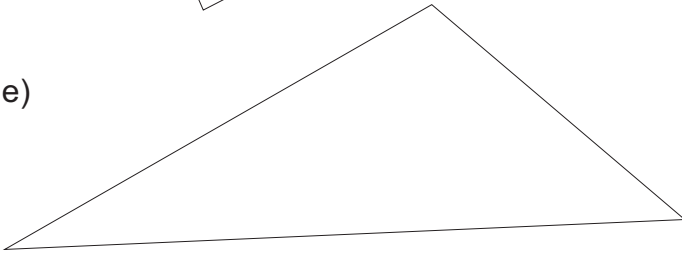
c)



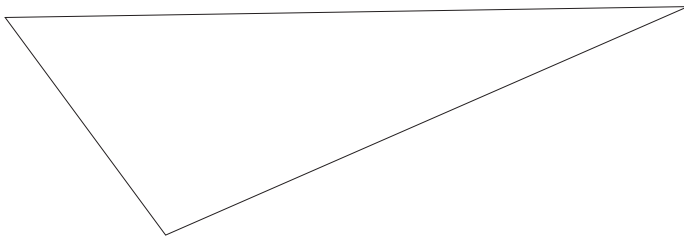
d)



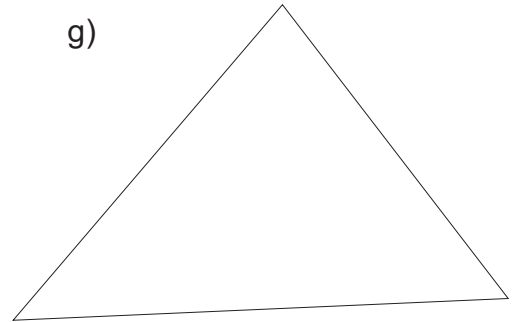
e)



f)



g)



a)

a=

b=

c=

h=

b)

a=

b=

c=

h=

c)

a=

b=

c=

h=

d)

a=

b=

c=

h=

e)

a=

b=

c=

h=

f)

a=

b=

c=

h=

g)

a=

b=

c=

h=